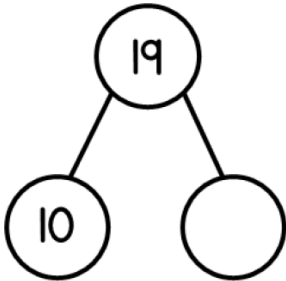


Place value to 20 Revision - 4th March

Answer the questions all about numbers to 20.

Complete the part-whole model.



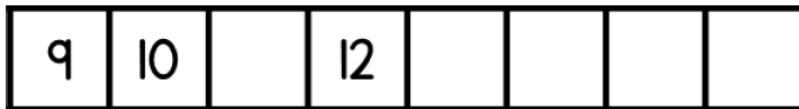
Write these numbers in words

11 _____

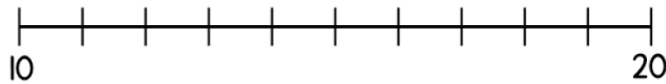
16 _____

20 _____

Complete the missing numbers.



Draw an arrow to the number 19



Order the numbers from
smallest to largest.



_____ _____ _____ _____
smallest _____ largest