






04.03.21

WALT: Understand and show how to solve word problems using money.

Independent/Supported/LA

 Pear 10p	 Orange 20p	 Apple 15p	 Lemon 20p	 Melon 30p
---	--	---	--	--

- 1) How much would it cost to buy a pear and a lemon?
- 2) Stacey bought an orange and an apple. How much did it cost?
- 3) Jess bought a melon and an apple. How much did she spend?
- 4) A banana costs 10p more than an apple. How much do bananas cost?
- 5) Nathan bought four pears. How much did he spend?
- 6) Which two fruits can you buy for exactly 45p?
- 7) Sam had 50p to spend. How much more would he need if he wanted to buy a melon, an apple and a pear?
- 8) Sophie has 50p to spend in the shop. She wants to buy three different pieces of fruit. What could she get?
- 9) Dylan had £1. He got 85p change when he bought a fruit. What did he buy?
- 10) Jack's mum sends him to buy an orange, a melon, a lemon and a pear. She gives him 70p. Is this enough?