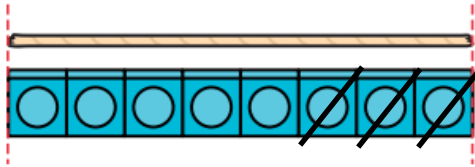


- 1 A piece of string is 8 cubes long.

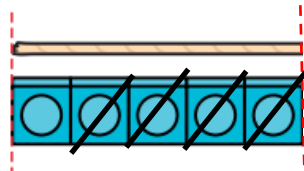


I cut off a piece that is 3 cubes long.

How long is my string now?

$$8 - 3 = \square \text{ cubes long}$$

- 2 A piece of string is 5 cubes long.




I cut off a piece that is 4 cubes long.

How long is my string now?

$$5 - 4 = \square \text{ cubes long}$$

- 3 A teddy bear is 10 cubes tall.
A doll is 16 cubes tall.



How much taller is the doll than the teddy bear?

$$16 - 10 = \square \text{ cubes taller}$$