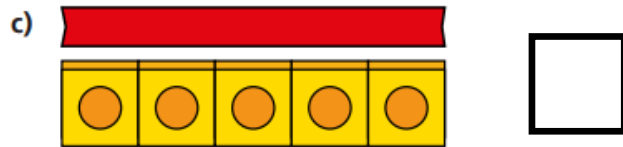

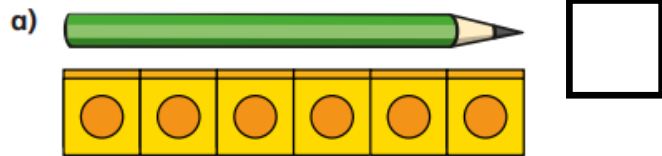


1 How many cubes long is each object?

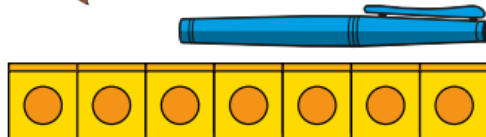


Do you agree with Rosie?

2




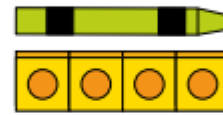
The pen is  
7 cubes long.



yes

no

3 Tommy is measuring objects.



The car and  
the crayon are the  
same length.

Do you agree with Tommy?

yes

no

4

Use cubes to measure some objects in  
your classroom.