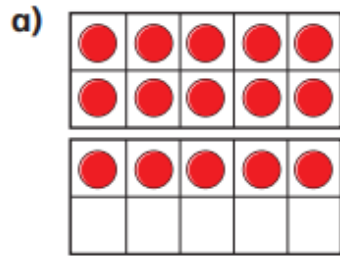
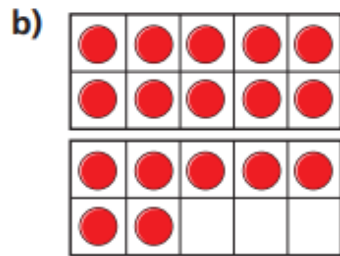


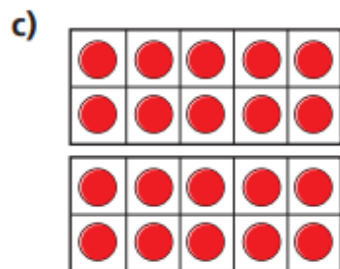
1 Cross out counters to work out the subtractions.



$15 - 4 = \square$



$17 - 5 = \square$



$\square = 20 - 3$

2 Teddy has these shapes.



He gives Eva 3 cones.

How many cones does Teddy have left?

3 Complete the subtractions.

a) $13 - 2 = \square$

c) $15 - 4 = \square$

b) $14 - 3 = \square$

d) $16 - 5 = \square$

Can you find the missing numbers?

$17 - \square = 11$

$19 - \square = 11$

