
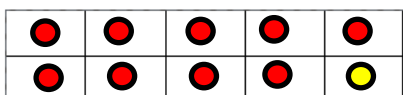
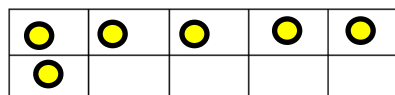
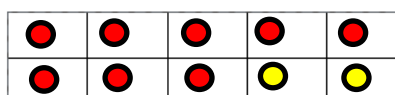


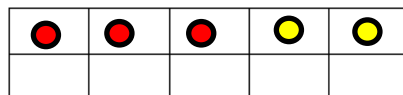
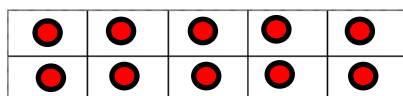
Addition within 20



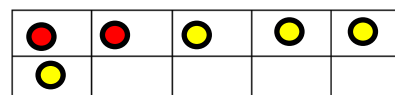
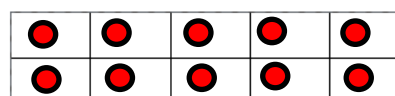
$$9+4= \square$$



$$8+8= \square$$



$$13+2= \square$$



$$12+4= \square$$

Use your tens frames and counters to find the answers to these calculations

$$13+4= \square$$

$$11+8= \square$$

$$16+3= \square$$

$$12+7= \square$$

$$17+3= \square$$

$$14+6= \square$$

$$15+5= \square$$

$$6+11= \square$$