






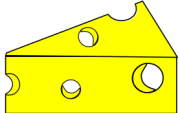


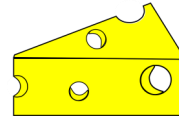
Let's Go Shopping! - 3rd March 2021

Look at the price list. Can you work out how much the different shopping bags cost? Use your number line to help you add by counting on.

<u>Price list</u>			
 15p	 7p	 3p	 5p
 11p	 17p	 12p	 6p



$$7p + 3p = \square p$$



$$12p + 6p = \square p$$



$$\square p + \square p = \square p$$



$$\square p + \square p = \square p$$



$$\square p + \square p = \square p$$



$$\square p + \square p = \square p$$