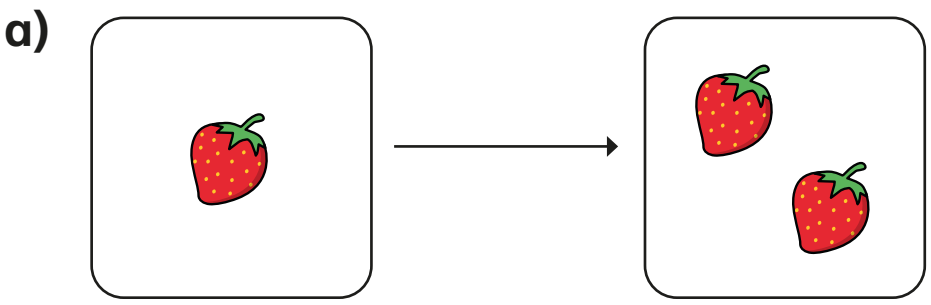


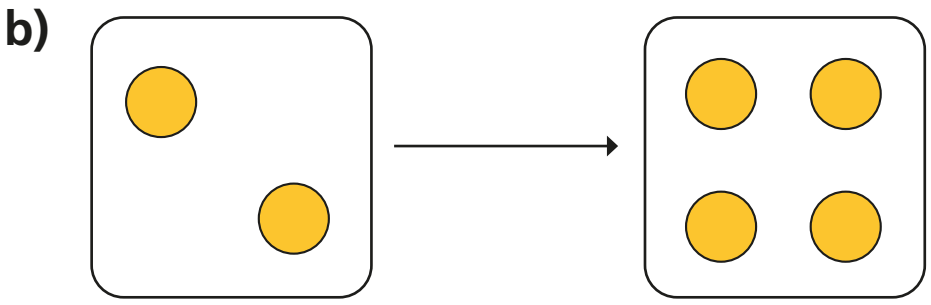
# Make doubles

I Complete the sentences.

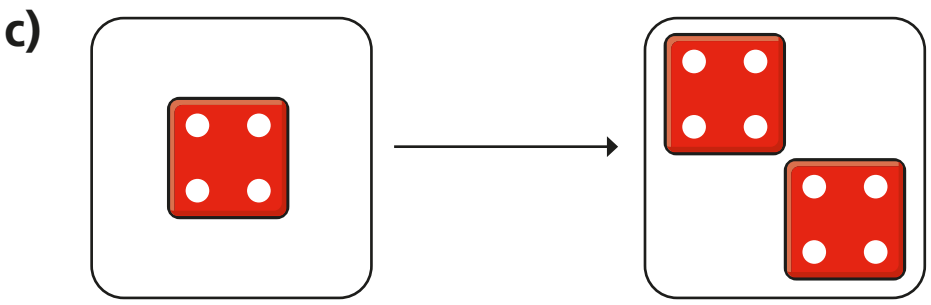
Use the pictures to help you.



Double 1 is



Double 2 is



Double  is

d)

Double  is

**2** Match the doubles to the additions.

Double 3	6 + 6
Double 6	7 + 7
Double 10	3 + 3
Double 7	10 + 10

*(Note: Blue lines connect Double 3 to 6+6, Double 6 to 7+7, Double 10 to 3+3, and Double 7 to 10+10.)*

**3** Fill in the gaps.

a) Double 15 is

b) Double 11 is




c) Double 12 is

d) Double 20 is

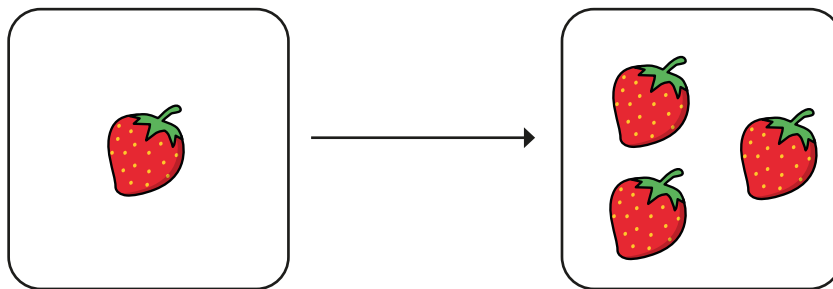
e) Double  is 8

f) Double  is 16

4



I have doubled the number of strawberries.



Do you agree with Mo? No

Talk about it with a partner.

