


Maths - Friday 22nd January

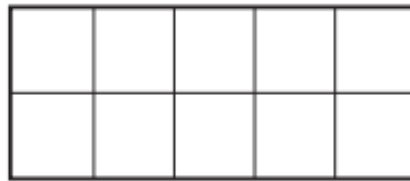
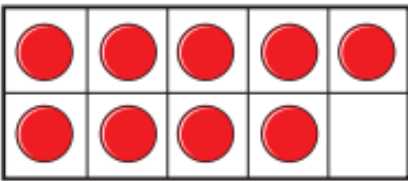
Add by counting on

1. There are 9 children on the bus.
5 more children get on the bus.



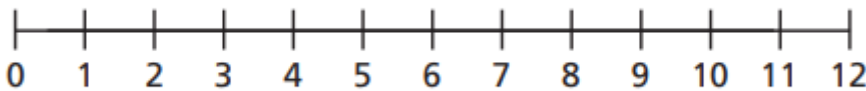
How many more
counters do you need
to draw?
Remember to count on
from 9

How many children are on the bus now?



2. Eva has 4 coins.
Jack gives her 7 more coins.
How many coins does Eva have now?

Draw your jumps on
the number line



3. **You will need your number line to help you answer these questions.**
Remember start with the biggest number to make it easier to count on.

$13+2=$ _____

$5+12=$ _____

$10+5=$ _____

$1+13=$ _____

$11+4=$ _____

$3+14=$ _____